

Mathe mit Mieze Mia

Mia hat einiges gelernt - 1

Ein Heft von _____

Minus ohne Rechenstrich



8

$32 - 4 = \underline{\quad}$

$45 - 8 = \underline{\quad}$

$35 - 6 = \underline{\quad}$

$94 - 8 = \underline{\quad}$

$24 - 7 = \underline{\quad}$

$77 - 8 = \underline{\quad}$

$86 - 8 = \underline{\quad}$

$32 - 6 = \underline{\quad}$

$53 - 7 = \underline{\quad}$

$51 - 8 = \underline{\quad}$

$65 - 6 = \underline{\quad}$

$33 - 6 = \underline{\quad}$

$45 - 7 = \underline{\quad}$

$62 - 5 = \underline{\quad}$

$33 - 8 = \underline{\quad}$

$35 - 7 = \underline{\quad}$

$43 - 8 = \underline{\quad}$

$66 - 7 = \underline{\quad}$

$63 - 8 = \underline{\quad}$

$94 - 7 = \underline{\quad}$

$73 - 8 = \underline{\quad}$

$36 - 7 = \underline{\quad}$

$74 - 7 = \underline{\quad}$

$54 - 8 = \underline{\quad}$

$73 - 6 = \underline{\quad}$


$65 - 8 = \underline{\quad}$

$46 - 8 = \underline{\quad}$



Die Zahlen bis 100

Kennst du die Hundertertafel?
Trage die Zahlen in gefärbten Felder ein.



Ergänzen am Rechenstrich

$78 + \underline{\quad} = 86$

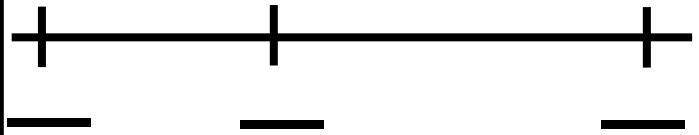
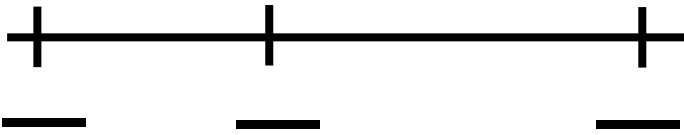
$57 + \underline{\quad} = 65$

erst +

dann +

erst +

dann +



$31 - \underline{\quad} = 29$

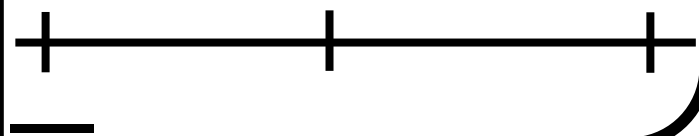
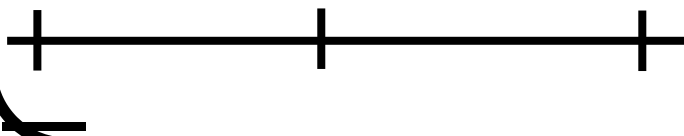
$61 - \underline{\quad} = 59$

dann -

erst -

dann -

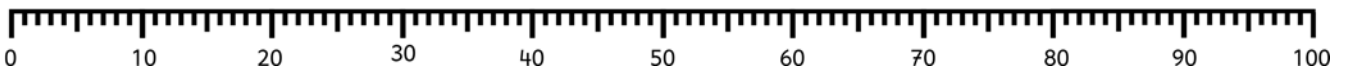
erst -





Die Zahlen bis 100

Kannst du auch noch den Zahlenstrahl?
Verbinde die Ballons mit dem Zahlenstrahl!



Rechnen mit Tabellen

+	8	7	6	9
43				
59				
82				

-	8	7	6	9
23				
51				
72				

+		6		8
54	59		61	
28				
		89		
	52			

-		8		6
62	53		55	
71				
		15		
	25			

Die Zahlen bis 100



3

Zählen und Weiterzählen

Mia sagt dir die Rechenregel. Du schreibst die Reihe weiter auf! Ergänze 5 weitere Zahlen.

54, 55, 56,

Immer
+ 1



77, 78, 79,

66, 64, 62,

Immer
- 2



39, 37, 35,

58, 61, 64,

Immer
+ 3




Es wird Zeit





11



Wie viel Zeit ist zwischen den beiden Uhren vergangen?





Stunden
Minuten




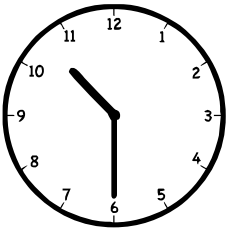
Stunden
Minuten





Stunden
Minuten




Stunden
Minuten



Stunden
Minuten




Stunden
Minuten






Geheime Botschaften

Mia hat auch eine Geheimschrift gelernt. Kannst du sie noch?
Schreibe auf, was sie bedeutet. Schreibe auch die Aufgabe dazu!



7Z + 4 E





70 + 4 = 74









Es wird Zeit

Trage die Uhrzeit ein.
Du kannst die Uhrzeit auf zwei Arten aufschreiben.






Plus am Rechenstrich



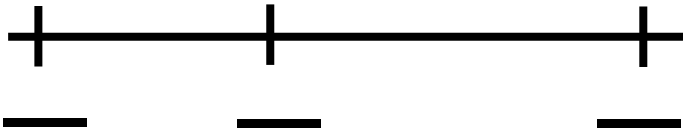
5

$49 + 9 = \underline{\quad}$



erst +

dann +

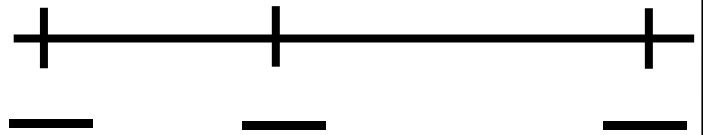


$86 + 9 = \underline{\quad}$



erst +

dann +

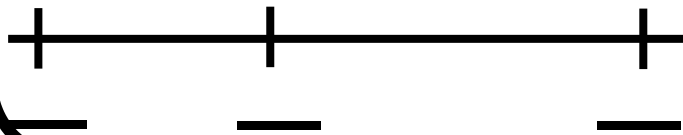


$68 + 5 = \underline{\quad}$



erst +

dann +



$39 + 5 = \underline{\quad}$



erst +

dann +



Wettrennen (1)



13

Bitte jemanden die Zeit für dich zu stoppen!
Wie schnell kannst du diese Aufgaben rechnen?



$40 + 30 = \underline{\quad}$

$27 + 20 = \underline{\quad}$

$20 + 32 = \underline{\quad}$

$80 - 30 = \underline{\quad}$

$10 + 90 = \underline{\quad}$

$53 + 30 = \underline{\quad}$

$30 + 65 = \underline{\quad}$

$90 - 60 = \underline{\quad}$

$20 + 20 = \underline{\quad}$

$62 + 10 = \underline{\quad}$

$80 + 11 = \underline{\quad}$

$40 - 10 = \underline{\quad}$

$30 + 30 = \underline{\quad}$

$13 + 70 = \underline{\quad}$

$10 + 85 = \underline{\quad}$

$90 - 70 = \underline{\quad}$

$40 + 50 = \underline{\quad}$

$22 + 70 = \underline{\quad}$

$40 + 27 = \underline{\quad}$

$70 - 30 = \underline{\quad}$

$60 + 20 = \underline{\quad}$

$43 + 30 = \underline{\quad}$

$50 + 45 = \underline{\quad}$

$50 - 30 = \underline{\quad}$

$50 + 10 = \underline{\quad}$

$69 + 20 = \underline{\quad}$

$70 + 18 = \underline{\quad}$

$60 - 50 = \underline{\quad}$

$70 + 20 = \underline{\quad}$

$61 + 40 = \underline{\quad}$

$80 + 8 = \underline{\quad}$

$50 - 50 = \underline{\quad}$

$30 + 40 = \underline{\quad}$

$52 + 10 = \underline{\quad}$

$60 + 42 = \underline{\quad}$

$90 - 10 = \underline{\quad}$

Ich habe es in _____ Minuten geschafft!!

Plus ohne Rechenstrich



6

$74 + 8 = \underline{\quad}$

$67 + 4 = \underline{\quad}$

$68 + 4 = \underline{\quad}$

$15 + 7 = \underline{\quad}$

$14 + 7 = \underline{\quad}$

$27 + 8 = \underline{\quad}$

$22 + 6 = \underline{\quad}$

$48 + 7 = \underline{\quad}$

$26 + 9 = \underline{\quad}$

$68 + 4 = \underline{\quad}$

$88 + 2 = \underline{\quad}$

$36 + 5 = \underline{\quad}$

$27 + 5 = \underline{\quad}$

$22 + 9 = \underline{\quad}$

$68 + 4 = \underline{\quad}$

$26 + 9 = \underline{\quad}$

$58 + 5 = \underline{\quad}$

$65 + 7 = \underline{\quad}$

$63 + 9 = \underline{\quad}$

$21 + 9 = \underline{\quad}$

$55 + 5 = \underline{\quad}$

$48 + 3 = \underline{\quad}$

$28 + 6 = \underline{\quad}$

$16 + 6 = \underline{\quad}$

$86 + 6 = \underline{\quad}$

$84 + 8 = \underline{\quad}$

$62 + 9 = \underline{\quad}$

Wettrennen (2)



14

Bitte jemanden die Zeit für dich zu stoppen!
Wie schnell kannst du diese Aufgaben rechnen?



$34 + 5 = \underline{\quad}$

$22 - 7 = \underline{\quad}$

$55 + \underline{\quad} = 63$

$55 - \underline{\quad} = 49$

$52 + 9 = \underline{\quad}$

$31 - 8 = \underline{\quad}$

$47 + \underline{\quad} = 54$

$71 - \underline{\quad} = 70$

$33 + 8 = \underline{\quad}$

$22 - 3 = \underline{\quad}$

$38 + \underline{\quad} = 42$

$64 - \underline{\quad} = 59$

$57 + 4 = \underline{\quad}$

$31 - 3 = \underline{\quad}$

$56 + \underline{\quad} = 63$

$22 - \underline{\quad} = 17$

$72 + 9 = \underline{\quad}$

$55 - 9 = \underline{\quad}$

$87 + \underline{\quad} = 96$

$31 - \underline{\quad} = 26$

$88 + 3 = \underline{\quad}$

$63 - 5 = \underline{\quad}$

$36 + \underline{\quad} = 41$

$40 - \underline{\quad} = 34$

$18 + 3 = \underline{\quad}$

$81 - 7 = \underline{\quad}$

$18 + \underline{\quad} = 25$

$82 - \underline{\quad} = 79$

$58 + 4 = \underline{\quad}$

$72 - 7 = \underline{\quad}$

$49 + \underline{\quad} = 52$

$74 - \underline{\quad} = 66$

$55 + 8 = \underline{\quad}$

$98 - 9 = \underline{\quad}$

$63 + \underline{\quad} = 71$

$83 - \underline{\quad} = 76$

Ich habe es in Minuten geschafft!!

Minus am Rechenstrich

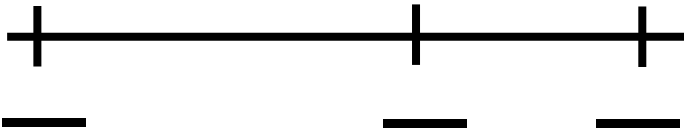


$53 - 8 = \underline{\quad}$



dann -

erst -

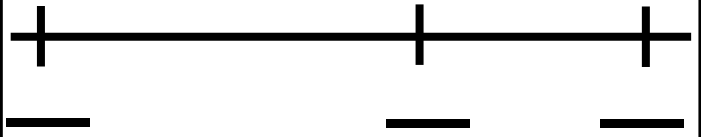


$41 - 9 = \underline{\quad}$



dann -

erst -

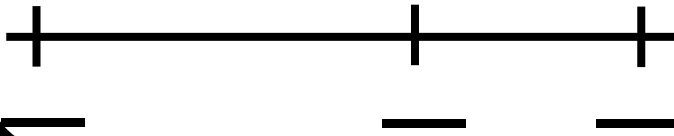


$93 - 7 = \underline{\quad}$




dann -

erst -

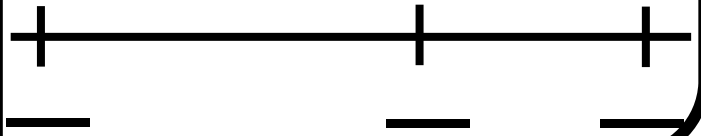


$41 - 6 = \underline{\quad}$



dann -

erst -



Puh!

Das war anstrengend.
Brauchst du jetzt eine Pause?
Es gibt von mir noch
viele weitere Hefte
mit tollen Aufgaben!
So wirst auch du zur
Mathe-Katze!
Deine Mia



OPEN EDUCATIONAL RESOURCES